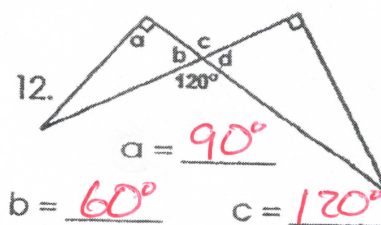
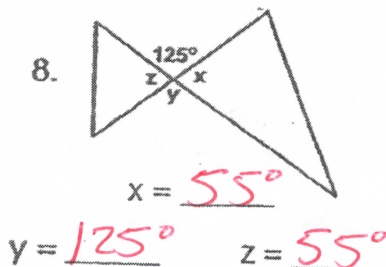
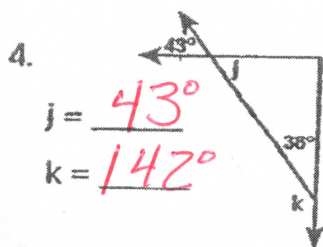
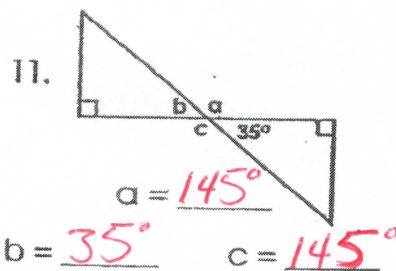
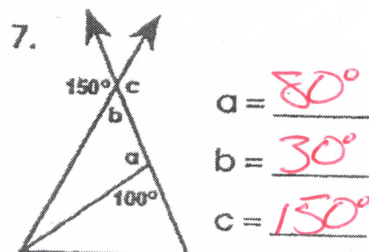
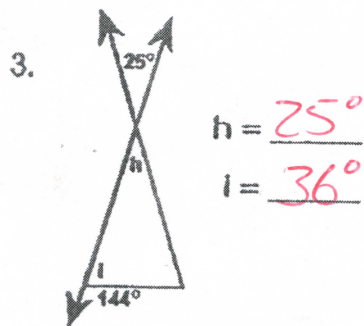
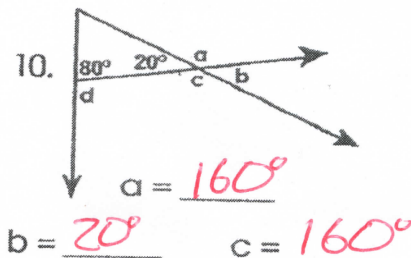
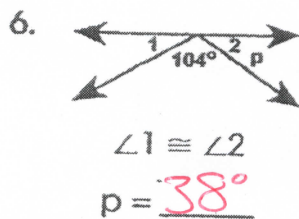
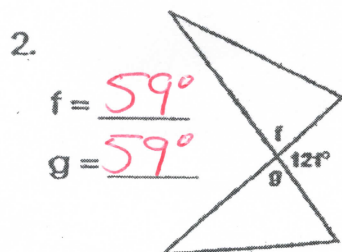
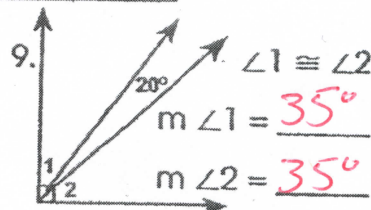
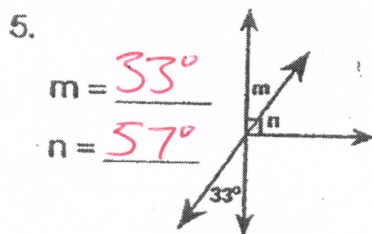
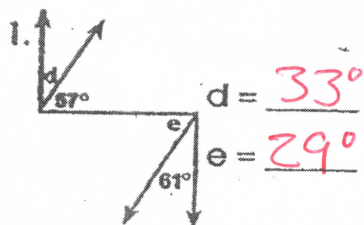
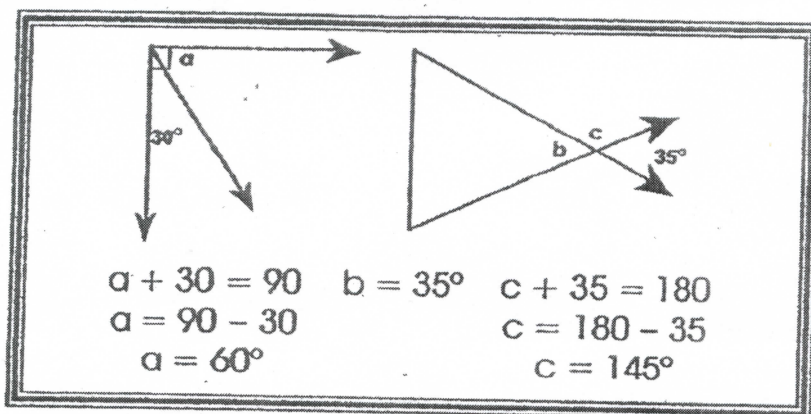


Practice with Special Angles

1.5 (day 2)
worksheet

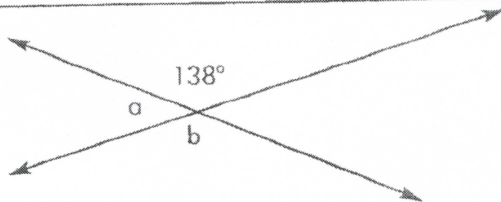


What question do you ask a basketball player from Indiana?

Solve for the missing angle measures. To figure out the joke, place the letter of each problem above the answer on the line(s) below. Some blanks will go unfilled.

C. $a = 42^\circ$

O. $b = 138^\circ$

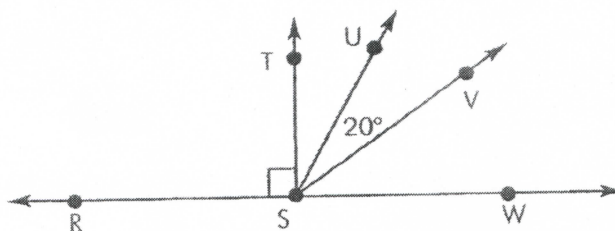


E. $m\angle TSW = 90^\circ$

O. $m\angle TSU = 35^\circ$

H. $m\angle USW = 55^\circ$

A. $m\angle RSV = 145^\circ$



$\angle TSU \cong \angle VSW$

R. $c = 148^\circ$

H. $d = 32^\circ$

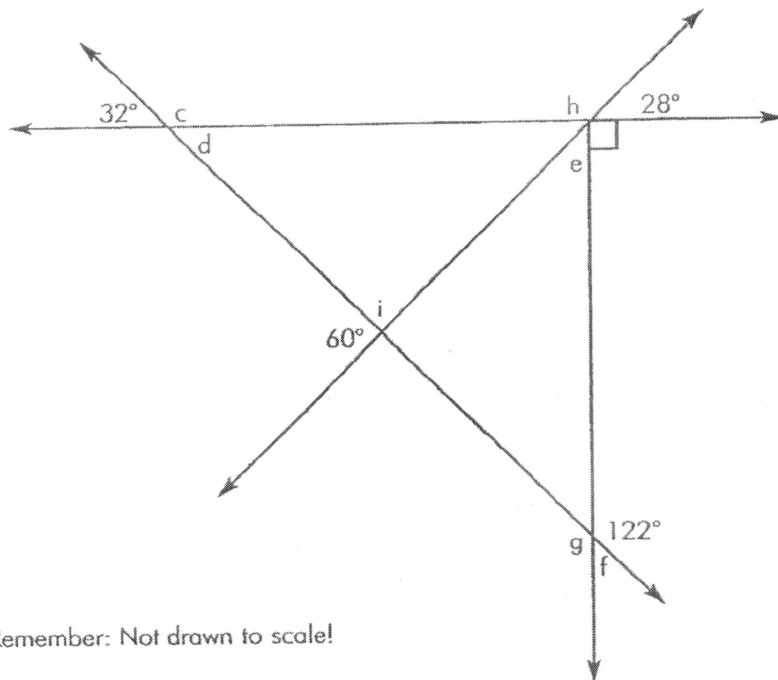
S. $e = 62^\circ$

O. $f = 58^\circ$

W. $g = 122^\circ$

C. $h = 152^\circ$

I. $i = 120^\circ$



Remember: Not drawn to scale!

122° 55° 58° 35° 62° 120° 90° 148° 71° 152° 138° 145° 42° 32°